

Draw a line that is 7cm long.

How long is this line?



What time is it?

How many minutes
are in an hour?

Remember to draw it, if you need to

7. Trish, Karen and Layla share equally a packet of nuts. There are 21 nuts in the pack. How many nuts do each get?



What would be best to use to measure a bench? Circle your answer

MM

CM

M

$$\begin{array}{r} 202 \\ +236 \\ \hline \end{array}$$

$$\begin{array}{r} 370 \\ +116 \\ \hline \end{array}$$

$$\begin{array}{r} 622 \\ +375 \\ \hline \end{array}$$

How long is this line in cm?



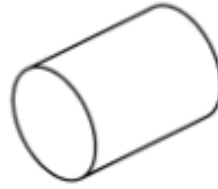
Draw a line that is 45 mm long.



What time is it?

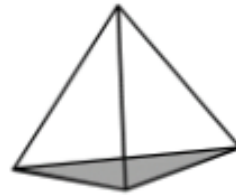
Break time is at 10:30, how many minutes until then?

School starts at 9:05am, how many minutes has it been since then?



Name of shape

Faces:

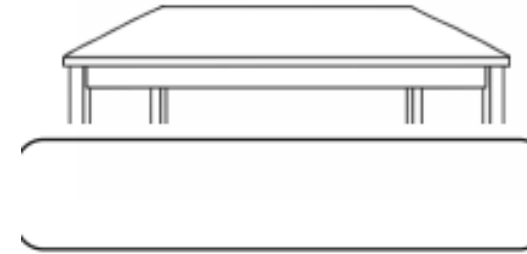


Name of shape

Faces:

Are these shapes 2D or 3D?

9. A carpenter makes tables. Some have 3 legs and some have 4 legs. He plans to make 5 tables with 3 legs, and 4 tables with 4 legs. How many legs will he need?



Kieran needs to run 2500 metres. In the first ten minutes he runs 639 metres and in the second ten minutes he runs 794 metres.

How much further does he still need to run?