

Addition and Subtraction

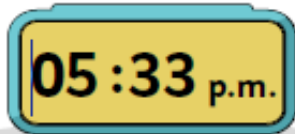
a) $800,000 - 500,000 =$

b) $508,040 - 204,020 =$

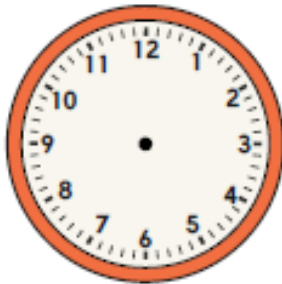
c) $9,432 - 999 =$

Time

Dora sees this time on her digital clock:



Draw hands on the clock to show the time on Dora's clock.



Remember to also have a go at TTRS, Spelling Shed and Lexia (if you have it)! All links are on the class page.

Forgotten your login? Let me know!

Reasoning

Shen is using mental strategies to calculate $80,400 + 11,000$.



I partitioned 80,400 into 80,000 and 400.

I partitioned 11,000 into 10,000 and 100.

$$80,000 + 10,000 = 90,000$$

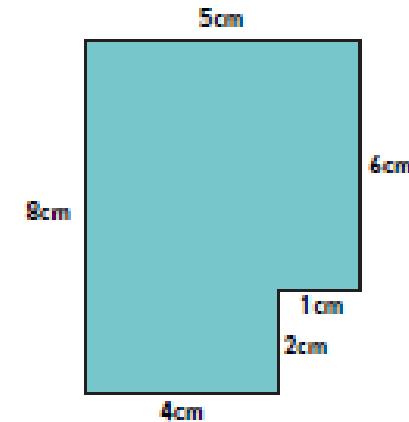
$$400 + 100 = 500$$

$$90,000 + 500 = 90,500.$$

Do you agree with Shen? Explain your answer.

Perimeter

Find the perimeter of the rectilinear shape. Explain how you find the perimeter of a shape.



Multiplication

$5 \times 5 = \underline{\hspace{2cm}}$

$4 \times 4 = \underline{\hspace{2cm}}$

$3 \times 3 = \underline{\hspace{2cm}}$

$2 \times 2 = \underline{\hspace{2cm}}$

$9 \times 9 = \underline{\hspace{2cm}}$

$8 \times 8 = \underline{\hspace{2cm}}$

$7 \times 7 = \underline{\hspace{2cm}}$

$6 \times 6 = \underline{\hspace{2cm}}$

$45 \div 5 = \underline{\hspace{2cm}}$

$11 \div 11 = \underline{\hspace{2cm}}$

$56 \div 8 = \underline{\hspace{2cm}}$

$16 \div 4 = \underline{\hspace{2cm}}$