
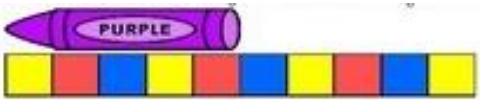
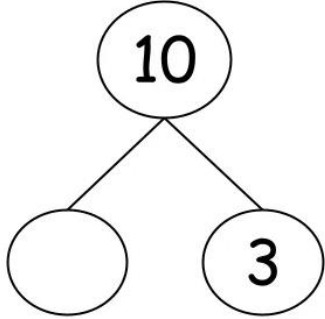


<p>What is one less than each of these numbers?</p> <ul style="list-style-type: none">• 11• 12• 15• 19• 20	<p>How much money does this picture show?</p> 	<p>Can you write these numbers in order from smallest to greatest?</p> <ul style="list-style-type: none">• 9 13 6• 12 5 10• 8 2 15• 19 7 4
<p>What is the length of the crayon?</p>  <p>_____ cubes long.</p>	<p>Can you fill in the number bond to make 10?</p> 	<p>What is half of each of these numbers?</p> <ul style="list-style-type: none">• 4• 8• 10