

Dexter and Whitney are adding 1s.



Dexter

When adding any 1-digit number to any 3-digit number, the answer will always be even.

No, the answer will always be odd.



Whitney

Who do you agree with?
Explain your answer.



Huan and Dani each have 252 stickers.
Huan is given an extra 6 stickers.
Dani is given an extra 7 stickers.
Who has more stickers?

Is there more than one way of working it out?



How many minutes are in half an hour?

Complete the number sentences.

- ▶ $847 = 800 + 40 + \underline{\quad}$
- ▶ $615 = \underline{\quad} + 10 + 5$
- ▶ $324 = 300 + \underline{\quad} + \underline{\quad}$
- ▶ $560 = 500 + \underline{\quad}$
- ▶ $\underline{\quad} = 400 + 70 + 9$
- ▶ $\underline{\quad} = 300 + 2$

It is half past two.
My lesson started 45 minutes ago.
What time did it start?

School finishes at twenty five past three. How long until the end of the day?

Complete the calculations below

$$165 + 7 =$$

$$252 + 6 =$$

$$395 + 9 =$$

$$478 + 1 =$$

$$546 + 7 =$$

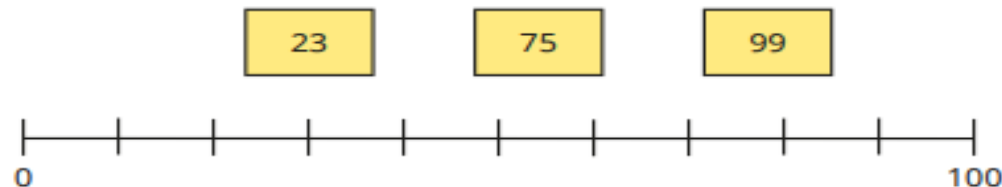
$$659 + 3 =$$

$$765 + 3 =$$

$$971 + 8 =$$

What is the 10th month?
Do you know how many days are in that month?

Draw an arrow to estimate where each number belongs on the number line.



Dexter and Whitney are adding 1s.



Dexter

When adding any 1-digit number to any 3-digit number, the answer will always be even.




Whitney

No, the answer will always be odd.


Who do you agree with?
Explain your answer.




How many tens are there in 100?



How many tens are there in 200?



Complete the sentences to describe the number.



There are _____ tens in 100



There are _____ hundreds in 500

There are _____ tens in 500

Complete the table below

- 3	Number	+ 3
290	293	296
	294	
	295	
	296	

Complete the bar models below



How many minutes are in an hour?

What is the 10th month of the year?
What month comes after?

True or false
135 is a multiple of 5.