

a.					b.					c.					d.				
	5	8	1			6	7	2			7	6	0			9	0	2	
+	2	3	8		-	3	3	9		-	3	2	5		+	3	7	8	
e.					f.					g.					h.				
	6	0	9			3	2	6			4	8	7			5	6	9	
-	5	2	6		+	4	1	9		+	1	3	3		+	6	5	0	

$$3 \times 7 =$$

$$5 \times 6 =$$

$$4 \times 9 =$$

$$11 \times 8 =$$

$$5 \times 15 =$$




What is a 5 sided shape called?
What is an 8 sided shape called?

What is the name of the shape?
What are its properties?

Complete the grid below, counting in 5s and 50s

5	10	15												
50	100	150												

What do you notice?



What time is it?

What times table do you find the hardest? Practise it below...

Sam has 594 sweets. Isla has 377 sweets. How many sweets are there altogether?

	8	5		2	4		4	6		7	3
-	3	2		+	3	0		+	3	3	

True or false

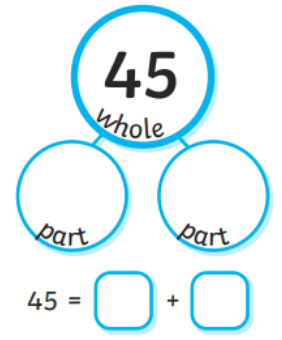
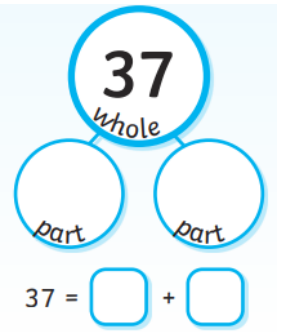
$$4 \times 3 = 12$$

$$5 \times 3 = 15$$

Fill in the missing multiples of 3

1	2	3		5	6	7		9	10
11		13	14	15		17	18	19	
21	22	23		25	26	27		29	30
31		33	34	35		37	38	39	
41	42	43		45	46	47		49	50
51		53	54	55		57	58	59	

List any quadrilaterals that you know (4 sided shape)



I have 375 stickers. Harriet has 463. How many stickers do we have altogether?

Edie runs 123 miles. William runs 159 miles. How many miles did they run altogether?