

Write < > or = to complete the number sentences

831 ○ 168

393 ○ 560

695 ○ 152

756 ○ 408

561 ○ 395

What is the 12th month?

Match the shape to the correct name

triangle



square



pentagon



hexagon



octagon

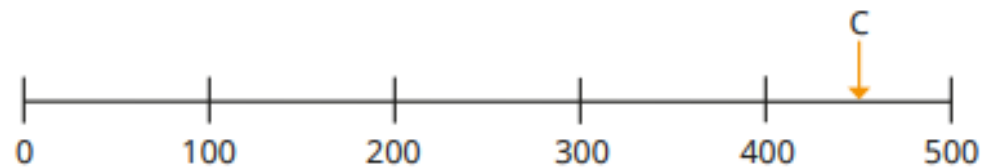
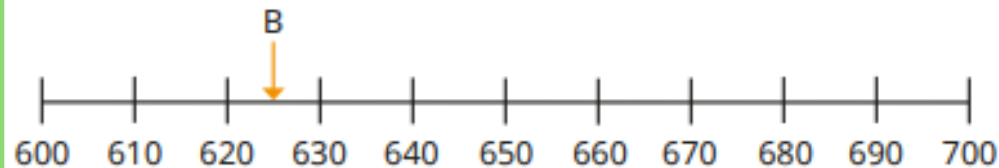
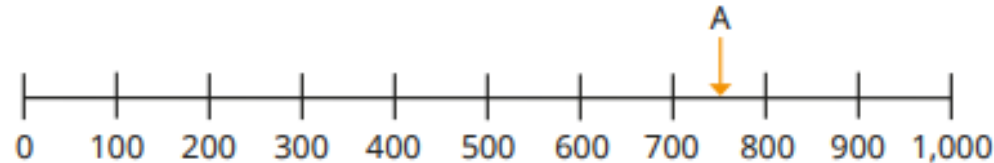


Are any of the shapes quadrilaterals?

If so, which ones?

Can you think of any others?

Estimate what the arrows are pointing to



$$3 \times 4 =$$

$$10 \times 11 =$$

$$6 \times 5 =$$

$$8 \times 4 =$$

$$5 \times 4 =$$

$$2 \times 7 =$$

$$10 \times 6 =$$

School finished at 3 o'clock. It takes me 30 minutes to get home. What time do I arrive home?