

Draw a line to match the sum to the correct answer.

**3 + 11**

**16 + 3**

**4 + 10**

**12 + 7**

**8 + 12**

**7 + 7**

19

17

14

19

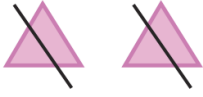


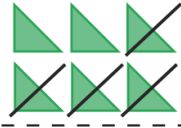
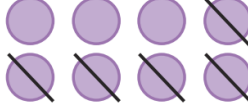
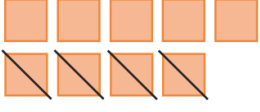
15

14

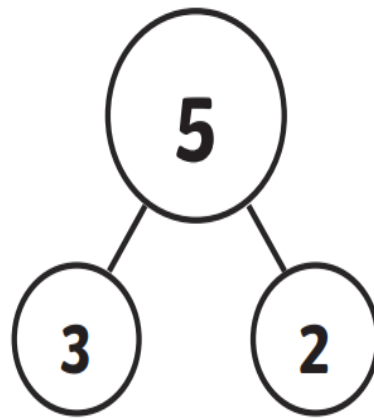
11

20

Can you write the number sentence for each picture?

	$2 - 2 = 0$		<input type="text"/> - <input type="text"/> = <input type="text"/>
	<input type="text"/> - <input type="text"/> = <input type="text"/>		<input type="text"/> - <input type="text"/> = <input type="text"/>
	<input type="text"/> - <input type="text"/> = <input type="text"/>		<input type="text"/> - <input type="text"/> = <input type="text"/>

Can you complete the eight fact families using the part whole model?



<input type="text"/>	+	<input type="text"/>	=	5
<input type="text"/>	+	<input type="text"/>	=	5
5	-	<input type="text"/>	=	<input type="text"/>
5	-	<input type="text"/>	=	<input type="text"/>

5	=	<input type="text"/>	+	<input type="text"/>
5	=	<input type="text"/>	+	<input type="text"/>
<input type="text"/>	=	5	-	<input type="text"/>
<input type="text"/>	=	5	-	<input type="text"/>

