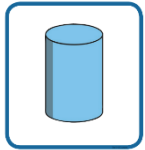


Spring 1 Week 1 Homework

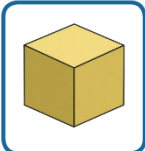
Can you match the shape to the label?



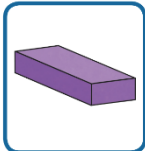
cone



cuboid




pyramid



cube



sphere



cylinder

Can you spot any of these shapes in your home?

Make a list on the back.

What number does each picture represent?











Subtraction.

$4-1=$

$7-3=$

$9-5=$

$10-2=$

$13-0=$

$14-5=$

$18-7=$

Complete the number tracks.

10 _ 12 _ 14 15 _ _ 18

15 _ 13 _ 11 _ _ 8 7 _

_ 19 18 17 _ 15 _ 13