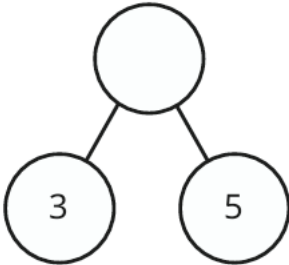
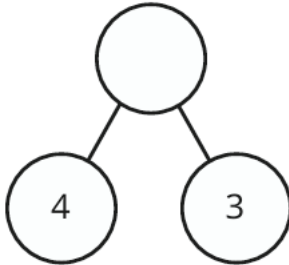
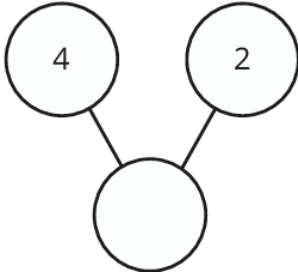


<p>What is 1 more than each of these numbers?</p> <ul style="list-style-type: none">● 12● 5● 18● 16	<p>Complete the following number sentences with the greater than or less than symbol.</p> <p>5 _____ 9</p> <p>7 _____ 2</p> <p>8 _____ 0</p> <p>0 _____ 3</p>	<p>Subtraction.</p> <p>4 - 1 =</p> <p>8 - 3 =</p> <p>10 - 4 =</p> <p>12 - 5 =</p> <p>14 - 0 =</p>
<p style="text-align: center;">23</p> <p>What is this number?</p> <p>What is one more than this number?</p> <p>What is one less than this number?</p>	<p>Can you fill in the missing numbers on the part whole models?</p> <p>a) </p> <p>b) </p> <p>c) </p>	