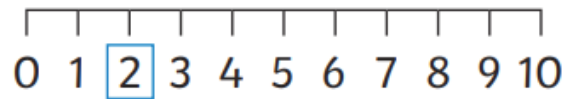


Put these numbers in order, starting with the highest.


14 12 21 4 11 18



Can you solve these sums?



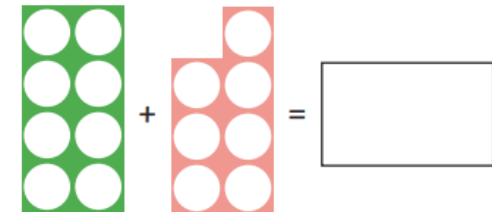
2 + = 8



13 - 1 =



= 10 - 4



12 has ___ ten and ___ ones.

15 has ___ ten and ___ ones.

10 has ___ ten and ___ ones.

18 has ___ ten and ___ ones.

We have designed and made our own board games. Play your board game with your family and see who wins.

Think about what works well with your game and what might you change.

