

Complete the number sentences.

$5 + 4 =$

$15 + 4 =$

$1 + 3 =$

$11 + 3 =$

$6 + 4 =$

$16 + 4 =$

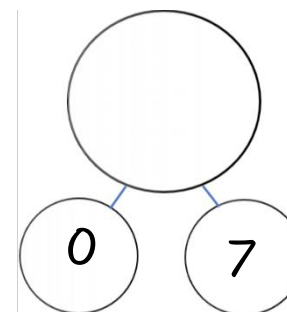
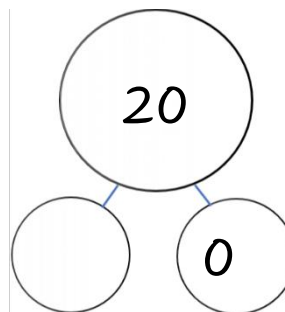
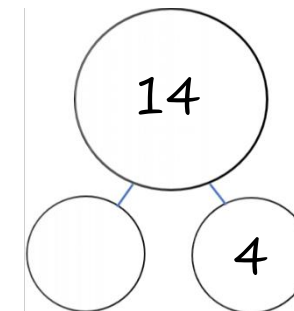
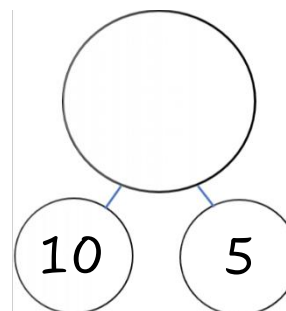
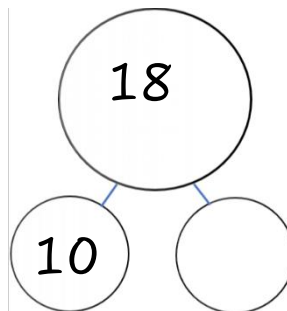
$8 + 2 =$

$18 + 2 =$

$7 + 2 =$

$17 + 2 =$

Partitioning tens and ones.



How many apples are there altogether?

