



Draw the dots to solve the doubles.



Double 7 is _____




Double 9 is _____

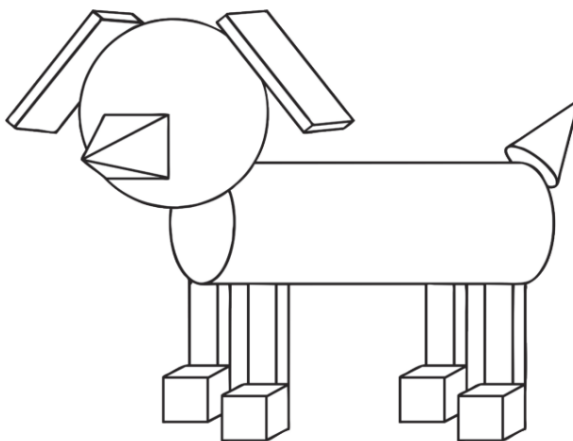


Double 8 is _____

On this blank number line, can you mark on the numbers 5, 8, 10, 12, 15 and 19?



Name and count the 3D shapes.



Shape	Name	Amount

Subtraction

$20 - 7 = \square$

$20 - 2 = \square$

$20 - 20 = \square$

$20 - 3 = \square$

$20 - 9 = \square$

$20 - 5 = \square$

