




Group the objects into groups of 10 by drawing around them.



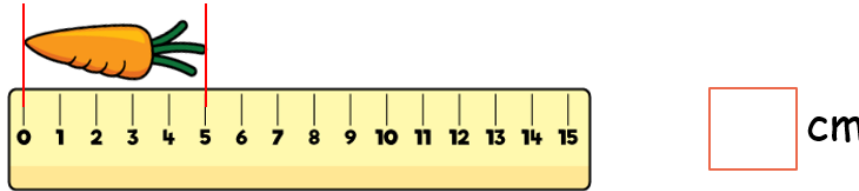
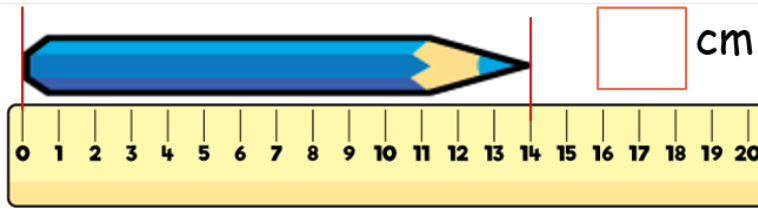
There are ____ tens and ____ more.
The number is ____.



There are ____ tens and ____ more.
The number is ____.



There are ____ tens and ____ more.
The number is ____.



Challenge:
Can you find three things in your home which are longer than your foot?
Shorter than your foot?
Write them on the back of the sheet.

Fill in the missing number tracks.

10, ____, 30, 40, 50, ____, 70, 80, ____

25, 26, 27, 28, ____, ____, 31, 32, ____

41, 42, ____, 44, ____, 46, 47, ____, 49

38, 37, ____, 35, ____, ____, 32, 31, ____

48, ____, 50, ____, ____, 53, 54, ____, 56