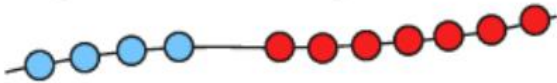


Section 1

Write a number sentence to show how many beads there are altogether.



Section 2

Draw and colour the next 2 cars in the pattern.



Section 3

If today is Tuesday, what is it tomorrow?

Put a circle around the correct day.

Monday Wednesday Thursday

Section 5

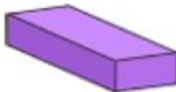
Draw lines to match the name and the shape.



cube



cuboid



triangular prism

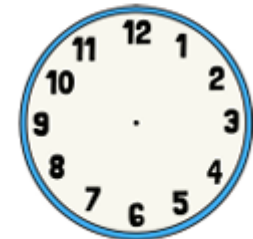
Section 6

Which jug is empty?
Tick the correct one.



Section 7

Make this clock show 4 o'clock.



Section 4

Imagine seeing 2 elephants at the zoo.

How many legs would you see?

Section 8

How much money is here?

