



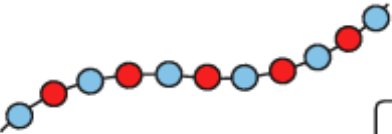
Section 1
I have 3 pairs of shoes.
How many shoes is that altogether?



Section 2
Shep had 3 dog biscuits.
Rover had 5. How many more biscuits did Rover have?




Section 3
Count the beads and write the number.



Section 4
I have 16p and I lose 5p.
How much money have I got left?



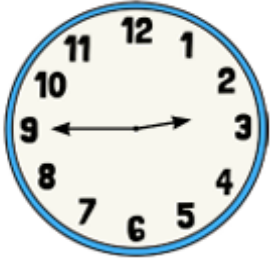
Section 5
Cut the cake into quarters.



Section 6
What numbers are missing?

10	8	6			0
----	---	---	--	--	---

Section 7
What time is it?



3 o'clock
quarter past 7
quarter to 3

Section 8
Complete the number pairs:

