

### Section 1

There are 20 biscuits in a packet.

Grace eats 5.

Sara eats 6.

How many are left in the packet?



### Section 2

Match the numbers with their names:

12                  sixteen

15                  eight

8                    twelve

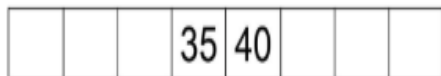

16                  fifteen

### Section 5

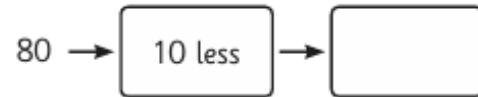
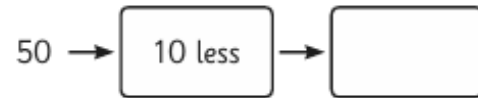
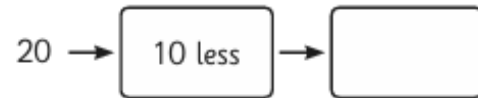
Draw the coins you need to make 14p.

### Section 3

Can you fill in the missing number tracks?



### Section 4



### Section 7

Draw a picture to show this:  
 $1 + 9 = 10$

### Section 6

Choose the correct symbol to complete the number sentence.

- x +

2  5 = 7

8  4 = 4

### Section 8

It's Mickey's birthday tomorrow. Today is Saturday. What day is Mickey's birthday?