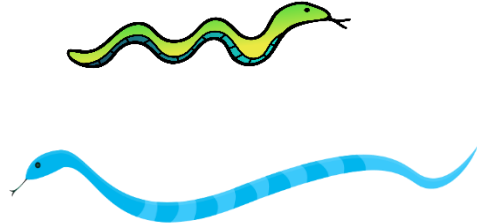
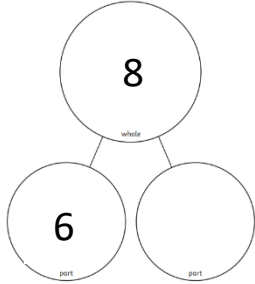




|  |   |   |
|--|---|---|
| <p>Subtraction.</p> $8 - 5 = \underline{\quad}$ $6 - 2 = \underline{\quad}$ $9 - 4 = \underline{\quad}$ $10 - 1 = \underline{\quad}$ $5 - 5 = \underline{\quad}$ | <p>Which snake is the longest? Circle your answer.</p>  | <p>Complete the part whole model and write a number sentence.</p>  <p>_____</p>  |
| <p>14</p> <p>What is this number?</p> <p>What is one more than this number?</p> <p>What is one less than this number?</p>  | <p>Fill in the missing numbers.</p> <p><input type="text"/> 9 <input type="text"/> 11 <input type="text"/></p>                            | <p>There are 5 birds on a bird table.</p> <p>2 more join them.</p> <p>How many birds are on the bird table now?</p>   |