

Summer 2 Week 3 Homework

### Section 1

I have 2 pairs of shoes.

How many shoes is that altogether?




### Section 2

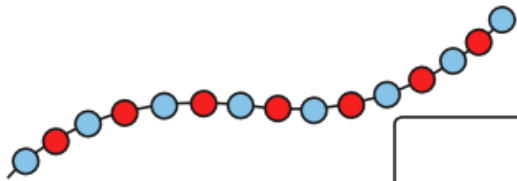
Shep had 3 dog biscuits.

Rover had 4. How many more biscuits did Rover have?




### Section 3

Count the beads and write the number.




### Section 4


I have 16p and I lose 5p.

How much money have I got left?




### Section 5

Cut the cake into quarters.




### Section 6

What numbers are missing?

10	8	6			0
----	---	---	--	--	---

### Section 7

What time is it?



5 o'clock

Half past 6

Half past 5

### Section 8

Complete the number pairs:

