

### Section 1

There are 15 cows in a field.

9 cows leave the field.

How many are in the field now?



### Section 3

Draw something that would weigh less than this:



### Section 4

22 → 10 less →

31 → 10 less →

44 → 10 less →

62 → 10 less →

### Section 2

Match up the coins to the amounts.



13p



40p



15p

### Section 6

23 people are on the bus.

5 get off.

2 more get on.

How many are on the bus now?

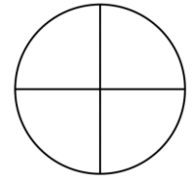
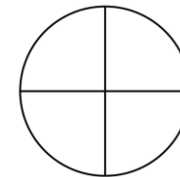
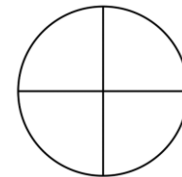


### Section 7

Shade one quarter

one half

three quarters



### Section 5

Draw the coins you need to make £1.80.

### Section 8

14 children go to a party. There are only 10 party hats. How many more hats are needed?

