
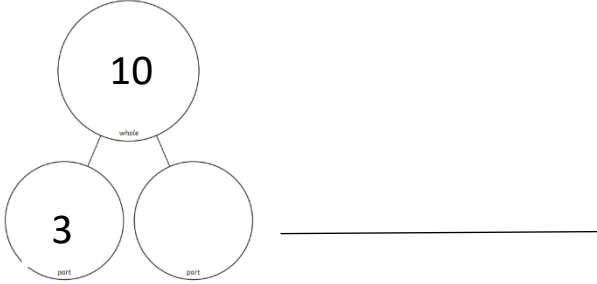



<p style="text-align: center;">Addition.</p> <p>$12 + 2 = \underline{\hspace{2cm}}$</p> <p>$15 + 3 = \underline{\hspace{2cm}}$</p> <p>$13 + 6 = \underline{\hspace{2cm}}$</p>	<p style="text-align: center;">Which giraffe is the tallest? Circle your answer.</p> <div style="text-align: center;"></div>	<p style="text-align: center;">Complete the part whole model and write a number sentence.</p> <div style="text-align: center;"></div>
<p style="text-align: center;">19</p> <p style="text-align: center;">What is this number? What is one more than this number? What is one less than this number?</p>	<p style="text-align: center;">Colour half of the shape.</p> <div style="text-align: center;"></div>	<p style="text-align: center;">Draw 8 circles and put them in groups of 2.</p> <p style="text-align: center;">Fill in the missing numbers.</p> <p style="text-align: center;">_____ groups of 2 = _____</p>