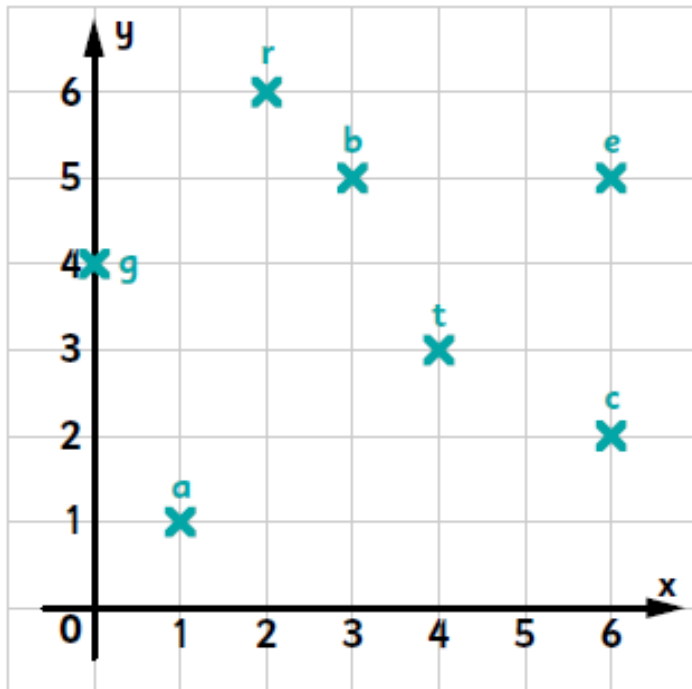


Remember to also have a go at TTRS or Numbots!

Coordinates

Find the coordinates in order. What do the letters spell?

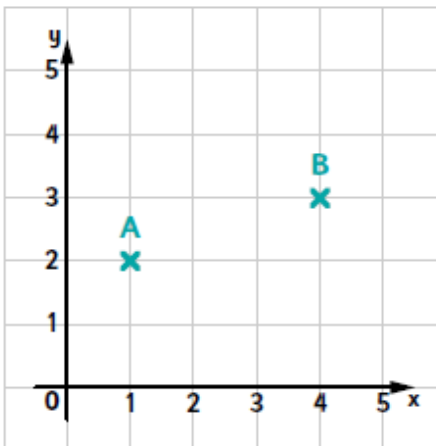


(0, 4) (2, 6) (6, 5) (1, 1) (4, 3)

Forgotten your login? Let me know!

Translation

True or False? If false, write the correct answer.

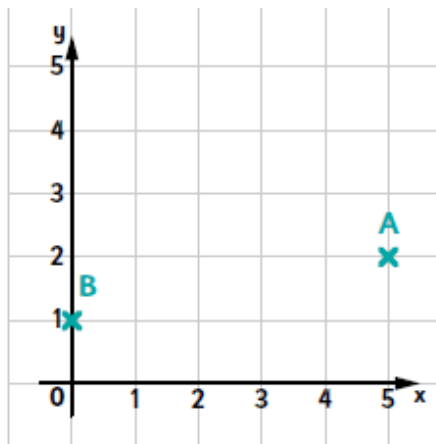


The translation from A to B is 3 right and 1 up.

true false

The coordinate of B is (4, 3).

true false



The translation from A to B is 5 right and 1 up.

true false

The coordinate of B is (1, 0).

true false

Multiplication

$7 \times 6 = \underline{\quad}$

$2 \times 7 = \underline{\quad}$

$8 \times 7 = \underline{\quad}$

$5 \times 9 = \underline{\quad}$

$4 \times 8 = \underline{\quad}$

$12 \times 12 = \underline{\quad}$

$6 \times 2 = \underline{\quad}$

$5 \times 12 = \underline{\quad}$

$9 \times 4 = \underline{\quad}$

$1 \times 87 = \underline{\quad}$

$11 \times 10 = \underline{\quad}$

$987 \times 0 = \underline{\quad}$

$36 \div 4 = \underline{\quad}$

$18 \div 2 = \underline{\quad}$

$12 \div 2 = \underline{\quad}$

$89 \div 1 = \underline{\quad}$

$50 \div 5 = \underline{\quad}$

$56 \div 56 = \underline{\quad}$

Time

Complete the tables.

Minutes	Hours
240	
	6
120	

Hours	Days
72	
	2
	4