

Name: \_\_\_\_\_



Year 2 homework 05.12.24  
Return by 12.12.24

### Addition and subtraction

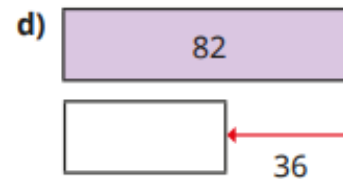

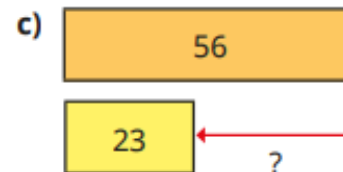
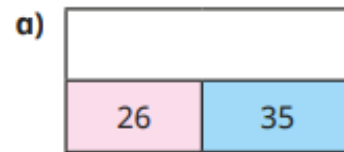
$25 + 23 =$	$25 - 23 =$
$61 + 17 =$	$67 - 11 =$
$36 + 22 =$	$36 - 22 =$
$19 + 31 =$	$49 - 31 =$
$75 + 13 =$	$75 - 13 =$
$47 + 42 =$	$47 - 42 =$
$15 + 24 =$	$55 - 24 =$
$57 + 32 =$	$47 - 32 =$
$81 + 17 =$	$88 - 17 =$
$34 + 16 =$	$34 - 12 =$
$57 + 12 =$	$57 - 13 =$
$64 + 25 =$	$66 - 25 =$

You could use the column method  
or draw out the tens and ones

Name these shapes



Complete the bar models



Numbots



Can you complete a robot in  
Numbots to gain a  
certificate next week?