

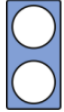

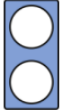


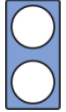


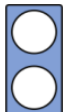
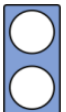






Name: _____

Year 2 homework 12.12.24
Return by 19.12.24

Complete the patterns

35, 40, 45, 50 _____, _____, _____, _____
30, 25, 20, 15 _____, _____, _____,
_____, _____, _____, _____, 55, 60, 65
_____, 5, 10, 15, 20, _____, _____, _____, 35
50, 45, 40, 35, 30, _____, _____, _____
_____, 10, _____, 20, _____, 30 _____, 40

Count in 2's

							
16	18						30
							
24				32			

Colour or circle the numbers that are...

Less than 70		
17	91	40
72	59	100
63	80	77

More than 50		
10	67	51
49	84	17
92	25	5

Between 40 and 90		
31	59	9
72	93	87
36	41	28

Times Tables Rockstars



Log on to TT Rockstars with your Numbots login.
Who will get the highest score in our class Top of The Rocks battle?