

Name: _____




Can you complete a robot in Numbots to gain a certificate next week?

Year 2 homework 23.01.25
Return by 30.01.25

$£1 + 50p + 10p =$
 $50p + 20p + 20p =$
 $£2 + £2 + £2 =$
 $£5 + £1 + 50p =$
 $10p + 10p + 10p =$
 $100p + 100p =$
 $50p + £1 + £1 =$

Which is the odd one out?







Ann wants to buy some new toys.



a) How much does it cost to buy the teddy and the yoyo?

b) How much does it cost to buy the toy train and the football?

c) How much does it cost to buy one of everything?

£20			
			
£50			
			

Spellings: raced used saving smiling writer