

Complete the table to show 1 & 10 more and less than the numbers shown.

10 less	1 less		1 more	10 more
		16		
		73		
		38		
		89		

$2 \times 2 =$

$2 \times 8 =$

$2 \times 4 =$

$5 \times 10 =$

$5 \times 5 =$

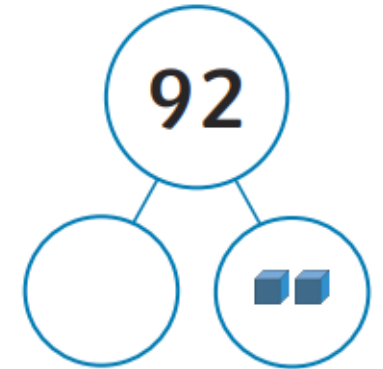
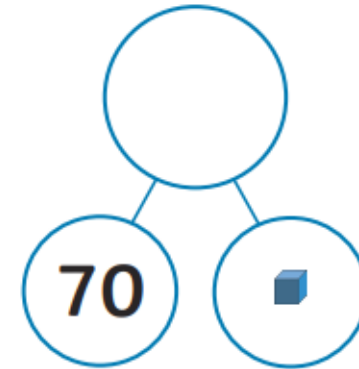
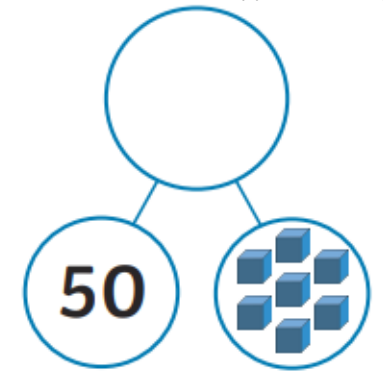
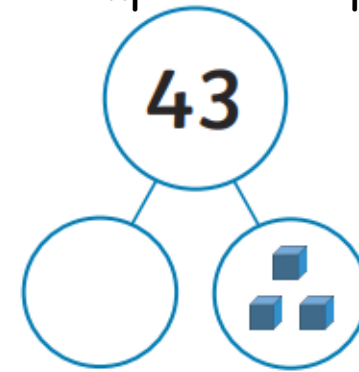
$5 \times 7 =$

$10 \times 10 =$

$10 \times 7 =$

$10 \times 3 =$

Complete the part-part whole models.



Fill in the missing numbers on the number lines.



A square is a quadrilateral.

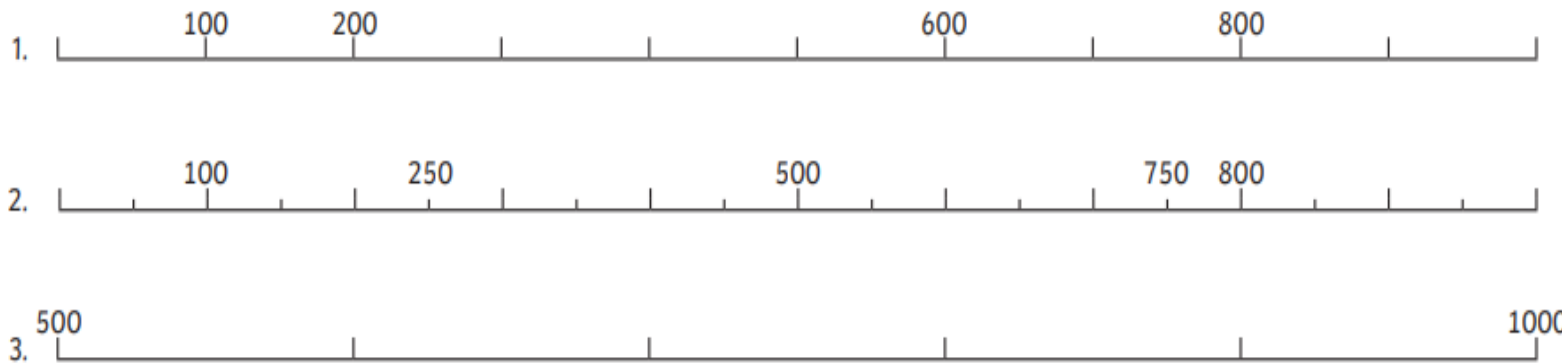
How many sides does a quadrilateral have?

Is a rectangle a quadrilateral?

Complete the table to show 1, 10 & 100 more and less than the numbers shown.

100 less	10 less	1 less		1 more	10 more	100 more
			376			
			831			
			754			
			895			

Fill in the missing numbers on the number lines.



Dexter and Kim are each thinking of a number.



My number is made of 4 hundreds, 5 tens and 2 ones.

Dexter



My number is made of 4 tens, 5 ones and 2 hundreds.

Kim



Dexter and Kim are thinking of the same number!

Tiny

Explain the mistake Tiny has made.

What numbers are Dexter and Kim thinking of?

What is the 7<sup>th</sup> month of the year?

How many sides does a quadrilateral have?