

8

What is this number?

What is one more than this number?

What is one less than this number?

Addition

$4+3=$

$5+1=$

$2+7=$


$0+5=$

$9+0=$

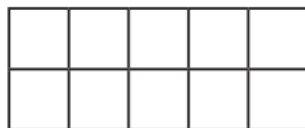
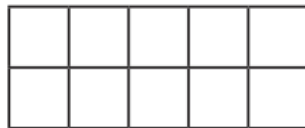
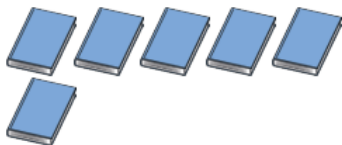
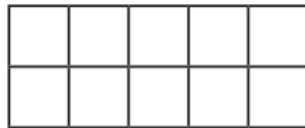
$10+3=$

Can you fill in the missing numbers?

Practise counting forwards and backwards.



Can you draw counters in the tens frame to represent the objects?



Can you name the shapes?



*Can you find one item for each shape around your home?