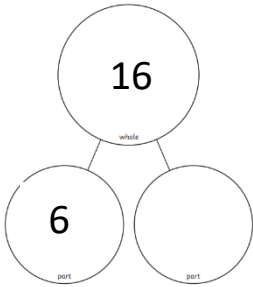





<p style="text-align: center;">Addition</p> <p>$18 + 2 = \underline{\quad}$</p> <p>$16 + 3 = \underline{\quad}$</p> <p>$13 + 5 = \underline{\quad}$</p> <p>$17 + 2 = \underline{\quad}$</p> <p>$11 + 6 = \underline{\quad}$</p>	<p>I am thinking of a number....</p> <p>It is greater than 5.</p> <p>It is less than 10.</p> <p>What could my number be?</p> <hr/> <p>Can you write your own question for me on the back?</p>	<p>Complete the part whole model and write a number</p> <div style="text-align: center;">  </div> <hr/>
<p style="text-align: center; font-size: 24pt;">23</p> <p>What is this number?</p> <p>What is one more than this number?</p> <p>What is one less than this number?</p>	<p>Complete the number bonds to 10.</p> <p>$0 + \underline{\quad} = 10$</p> <p>$1 + \underline{\quad} = 10$</p> <p>$2 + \underline{\quad} = 10$</p> <p>$3 + \underline{\quad} = 10$</p> <p>$4 + \underline{\quad} = 10$</p> <p>$5 + \underline{\quad} = 10$</p> <p>$6 + \underline{\quad} = 10$</p> <p>$7 + \underline{\quad} = 10$</p> <p>$8 + \underline{\quad} = 10$</p> <p>$9 + \underline{\quad} = 10$</p> <p>$10 + \underline{\quad} = 10$</p>	<p>Complete the sentences.</p> <div style="display: flex; justify-content: space-around; align-items: center;">  </div> <p>14 has <input type="text"/> ten and <input type="text"/> ones.</p> <div style="display: flex; justify-content: space-around; align-items: center;">  </div> <p>15 has <input type="text"/> ten and <input type="text"/> ones.</p> <div style="display: flex; justify-content: space-around; align-items: center;">  </div> <p>16 has <input type="text"/> ten and <input type="text"/> ones.</p>