

Subtraction

$14 - 3 = \underline{\quad}$

$18 - 5 = \underline{\quad}$

$12 - 1 = \underline{\quad}$

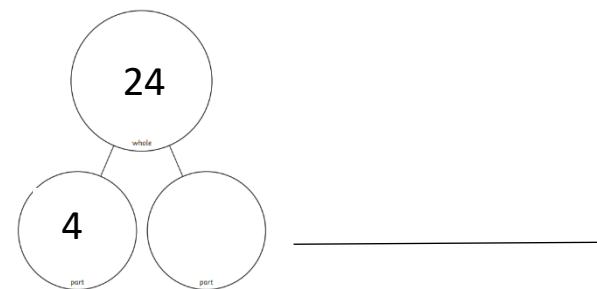
$17 - 4 = \underline{\quad}$

$20 - 3 = \underline{\quad}$

Which additions make 16?  
Circle your answers.

$14 + 2$      $15 + 2$      $10 + 6$      $1 + 16$

Complete the part whole model and write a number sentence.



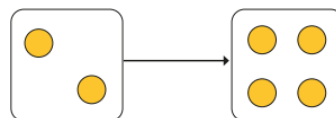
28

What is this number?

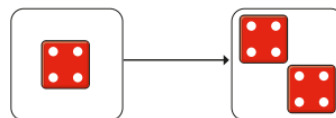
What is one more than this number?

What is one less than this number?

Complete the doubles.



Double 2 is



Double  is

Can you write these numbers in words?

11 \_\_\_\_\_

12 \_\_\_\_\_

13 \_\_\_\_\_

14 \_\_\_\_\_

15 \_\_\_\_\_