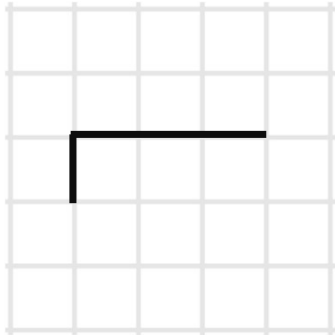


Year 5 Homework A - 14th March 2025

Remember to also have a go at TTRS!
Forgotten your login? Let me know!

Reasoning

A school raises £836 for charity. It splits the money evenly between 4 charities. How much money will each charity receive?



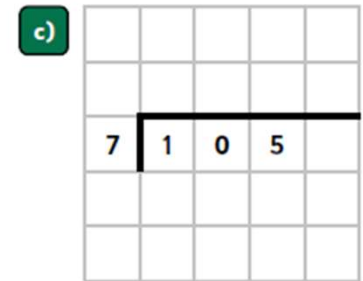
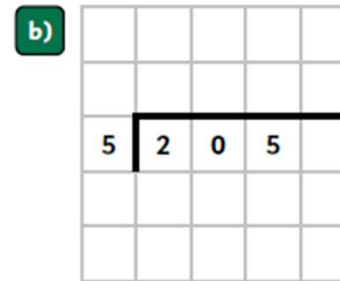
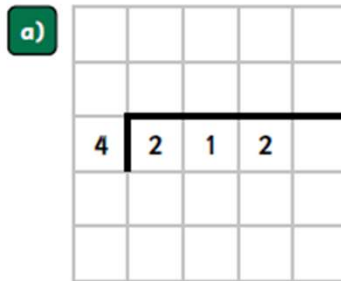
Number

Complete the table:
Remember: 5 or more, let it soar.
4 or less, let it rest.

Number	Rounded to the nearest 10	Rounded to the nearest 100	Rounded to the nearest 1,000
3,849			
814			
28,392			

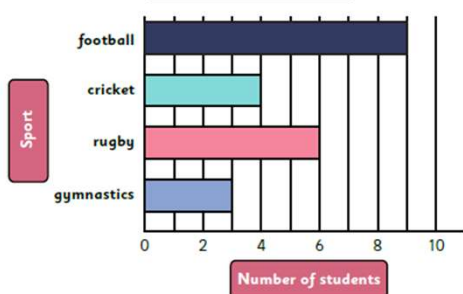
Multiplication

Use the bus stop method to solve these calculations.



Statistics

Children's favourite sport



a) What are the children's **most** and **least** favourite sports?

Multiplication

$3 \times 3 =$ _____.	$7 \times 6 =$ _____.	$108 \div 12 =$ _____.
$8 \times 6 =$ _____.	$0 \times 1 =$ _____.	$35 \div 7 =$ _____.
$7 \times 2 =$ _____.	$9 \times 9 =$ _____.	$121 \div 11 =$ _____.
$12 \times 9 =$ _____.	$5 \times 8 =$ _____.	$432 \div 1 =$ _____.