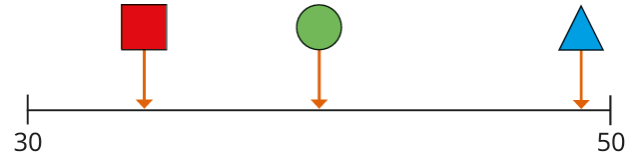


Homework Spring 2 Week 3 20/03/2025



What is double of each of these numbers?

- 2
- 4
- 8
- 10

Estimate the numbers on the number line.



What number could each shape be pointing to?

 =  =  =

42

What is this number?

What is one more than this number?

What is one less than this number?

Fill in the missing numbers.

1 less	Number	1 more
	31	
31		
		31
47		
		47

Can you read and write each tricky word?

many _____

our _____

laugh _____

who _____