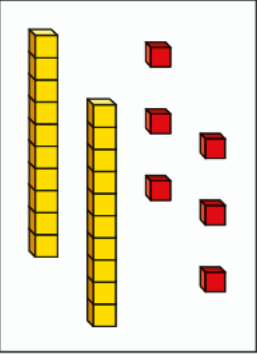
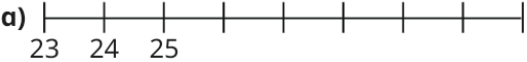
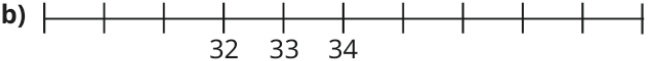



Homework Spring 2 Week 4 28/03/2025

<p>Complete the number bonds.</p> $15 + \underline{\quad} = 20$ $16 + \underline{\quad} = 20$ $17 + \underline{\quad} = 20$ $18 + \underline{\quad} = 20$	<p>What is one more and one less than the given number?</p> <p>1 less 1 more</p> <div style="display: flex; justify-content: space-around; align-items: center;"><div style="border: 2px solid orange; width: 100px; height: 100px; margin: 10px;"></div><div style="border: 1px solid gray; padding: 5px; margin: 10px;"></div><div style="border: 2px solid orange; width: 100px; height: 100px; margin: 10px;"></div></div>	
<p style="text-align: center;">48</p> <p>What is this number?</p> <p>What is one more than this number?</p> <p>What is one less than this number?</p>	<p>Complete the number lines.</p> <p>a) </p> <p>b) </p> <p>c) </p>	<p>Can you read and write each tricky word?</p> <p>because _____</p> <p>said _____</p> <p>my _____</p> <p>where _____</p>